

Name: \_\_\_\_\_

Block: \_\_\_\_\_

Date: \_\_\_\_\_

---

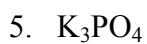
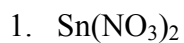
Chemistry 11

**Molar Mass and Formula Mass**

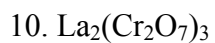
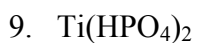
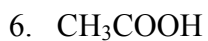
Assignment

---

Find the formula mass for each of the following compounds. Show your work.



Find the molar mass for each of the following compounds. Show your work.



Find the atomic mass or formula mass of the following elements or compounds. Show your work.

11. Sodium chloride

12. Nitric acid

13. Silver

14. Copper (II) sulphate dihydrate

15. Nitrogen gas

Find the molar mass of the following elements or compounds. Show your work.

16. Calcium carbonate

17. Potassium chlorate

18. Barium fluoride

19. Sulphurous acid

20. Sodium hydroxide