

## Chemistry 11 - Unit 2 Review

1. Complete the following table (Try it from memory first)


Prefix	Abbreviation	Exponent
giga		
	$\mu$	
		$10^6$
pico		
	d	
		$10^{-9}$
milli		
	k	
		$10^{-2}$

2. Make the following unit conversions

- $0.00085 \text{ L} = \text{_____ } \mu\text{L}$
- $432 \text{ ng} = \text{_____ } \text{g}$
- $50 \text{ ks} = \text{_____ } \text{Ms}$
- $2 \text{ cg} = \text{_____ } \mu\text{g}$
- $12 \text{ pL} = \text{_____ } \text{cL}$
- $0.35 \text{ g/s} = \text{_____ } \text{g/min}$
- $70 \text{ kV} = \text{_____ } \text{mV}$
- $0.1 \text{ dm} = \text{_____ } \text{mm}$
- $3.46 \text{ mg/s} = \text{_____ } \text{kg/ms}$
- $0.96 \text{ kg/L} = \text{_____ } \text{mg}/\mu\text{L}$

3. The density of molybdenum is 10.2 g/mL. What is the mass of a 0.60 L piece of Mo?
4. 110.9 mL of gadolinium has a mass of 0.875 kg. Calculate the density of gadolinium in units of g/L.
5. The density of tungsten is 19 300 g/L. Find the volume occupied by a 2.0 kg sample of tungsten.
6. a) The density of carbon dioxide at standard temperature and pressure is 1.96 g/L. Calculate the mass of a 600 mL sample of carbon dioxide.
- b) The density of air is about 1.29 g/L at standard temperature and pressure. Would carbon dioxide tend to rise up or sink down in the atmosphere? \_\_\_\_\_

7. Of the following balances, which is the most precise?



Answer \_\_\_\_\_. How do you know? \_\_\_\_\_

8. What is the uncertainty of balance "a" in question 7? \_\_\_\_\_

What is the uncertainty of balance "c" in question 7? \_\_\_\_\_

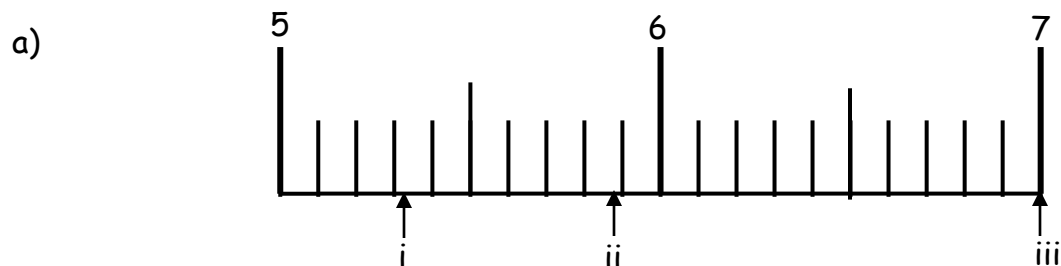
9. The \_\_\_\_\_ digit in any measurement has some uncertainty.

10. The number of certain digits + 1 is called the number of \_\_\_\_\_

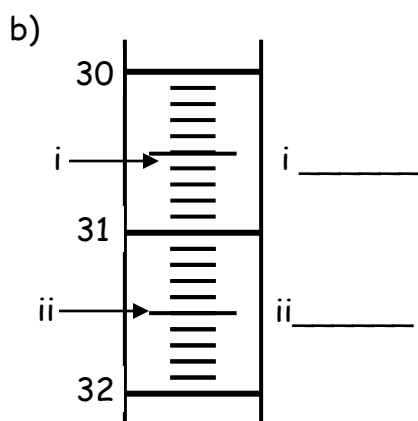
11. What is meant by the **accuracy** of a measurement? \_\_\_\_\_

---

12. On each of the following scales, determine the correct reading which the arrow is pointing to. The answer must be expressed in the number of significant digits which accurately reflects the precision of the instrument.

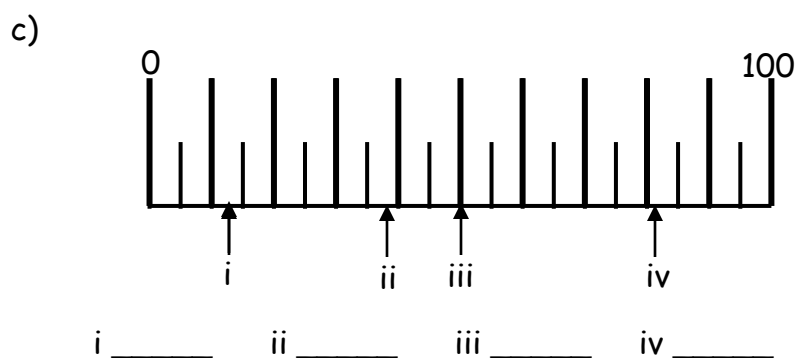


i) \_\_\_\_\_ ii) \_\_\_\_\_ iii) \_\_\_\_\_



i) \_\_\_\_\_

ii) \_\_\_\_\_



i) \_\_\_\_\_ ii) \_\_\_\_\_ iii) \_\_\_\_\_ iv) \_\_\_\_\_

13. Determine the number of **significant digits** (figures) in each of the following numbers.

a) 45.002 \_\_\_\_\_ b)  $3.400 \times 10^{-4}$  \_\_\_\_\_ c) 0.000003 \_\_\_\_\_ d) 3 000 \_\_\_\_\_

14. Express each of the following numbers to **2 significant digits** (figures).

a) 45 670 \_\_\_\_\_ b) 0.000 034 48 \_\_\_\_\_ c) 3 000 000 \_\_\_\_\_

d) 23.0954 \_\_\_\_\_ e)  $4.56219 \times 10^3$  \_\_\_\_\_ f) 9 \_\_\_\_\_

15. Perform the following calculations and express the answer in the correct number of significant digits or decimal places as justified by the data. Don't forget the rules for multiplication and division and for addition and subtraction.

a)  $3.4587 \times 0.0112 =$  \_\_\_\_\_      b)  $5.600 \times 10^{-7} / 0.700 =$  \_\_\_\_\_

c)  $8.6 + 0.4573 =$  \_\_\_\_\_      d)  $3.2697 - 0.411 =$  \_\_\_\_\_

e)  $2.68 \times 10^3 + 1.229 \times 10^5 =$  \_\_\_\_\_      f)  $2.3 \times 10^{-7} \times 8.22298 =$  \_\_\_\_\_

g)  $3.6437 \times 10^{-4} + 9.2103 \times 10^{-7} =$  \_\_\_\_\_

h)  $5.2468 \times 0.923 + 3.00210 \times 1.9999 =$  \_\_\_\_\_

i)  $(6.210 + 0.92)(3.75411 + 1.32410) =$  \_\_\_\_\_

j)  $\frac{(222.115 - 4.56892)}{(32.98 - 25.22316)} =$  \_\_\_\_\_